

Hi year 4, happy snow day!

Task 1: English Create a rhyming poem about a school snow day, can you follow ABAB and have 4 stanzas?

Go out into the snow and practice writing our weekly spellings. Can you write a sentence with them in?

Word families based on common words

phone

phonics

microphone

telephone

homophone

real

reality


realistic

unreal

realisation

Task 2: Draw a picture of the snowy scene outside of your house from your bedroom window. Use the sketching techniques we learnt such as hatching.

Task 3: Work out the areas of these ice-bergs



A=
B=
C=
D=
E=
F=
G=
H=
I=
J=



Winter Challenge Cards


1. How many skis are needed for 529 skiers?



twinkl.co.uk

Winter Challenge Cards


2. Tickets for an ice show cost £8. In one week 4815 tickets are sold. How much is taken at the box office?



twinkl.co.uk

Winter Challenge Cards

3. The Winter Wonderland Giant Wheel costs £6 for an adult ticket. There are 8269 adults who ride on the wheel. How much money was made on this ride?



Winter Challenge Cards

4. In December, 2352 people went skiing at the local ski centre. In January, the number goes up by 1399. How many people went skiing in January?



twinkl.co.uk

Winter Challenge Cards

5. It costs £31.50 for a ticket, with a £4 booking fee per ticket, to have a seat in the stalls area to see the pantomime Cinderella. How much would it cost 4 adults to see the show?



twinkl.co.uk

Winter Challenge Cards

6. In nine weeks' time, Lily and her family are going on their skiing holiday. How many days does she have to wait?



twinkl.co.uk

Winter Challenge Cards

7. It's been an icy night, and bags of grit are sold weighing 23kg. What is the total weight of 12 bags?



twinkl.co.uk

Winter Challenge Cards

8. Spring bulbs are sold in packs of 12. How many packs can be made from 1776 bulbs?



Winter Challenge Cards

9. 48 people buy hot chocolate from the hot drinks van at the park. Three eighths just have marshmallows, one third just have chocolate sprinkles. The rest have both toppings. How many people have both toppings?



Winter Challenge Cards

10. In a restaurant, eight identical tins of Winter Warmer soup hold 14 litres altogether. How much soup is there in one tin of soup, in millilitres?



Winter Challenge Cards

11. Hannah's Grandma knits 72 hats for the local January jumble sale. $\frac{7}{8}$ of them are stripy. How many are not stripy?

